


SECTION A

1. What do we call the representation of an object drawn as seen from above?

2. Give one responsibility of a child in a home.

3. Name one example of physical feature found in your area.

4. In the space below draw a symbol of a lake.



5.

6. In which direction does the sun rise?

7. Give one quality of a good map.

8. What do we call a person who grows crops and rears animals?

9. Name the symbol used on a map.



10. Give the place where we keep our money safely.

11. Why are symbols used on a map?

12. Write one economic activity in your Town council

13. Name one mineral mined in mountainous areas.

14. State one example of a lake you know.

15. Name any one example of a mountain.

16. Mention the largest lake in Uganda.

17. Name the person who keeps security at school.

18.

19. Mention the title for the King of Bunyoro.

20. Who assists the headteacher at school in his /her absence?

21. Name one group of people who wear uniform.

22. Give one group of people who wear uniform.

23. Name one type of a family.

24. Name one source of water.

25. Which title is given to the person who heads a school?

26. In which village is your school found.

27. Name one item found in the classroom.

28. Which language is commonly used in our school?

29. Where does a fish live? _____

30. Name one way how we can keep our school clean.

31. Where does a cook prepare food from?

32. Of what important are bees to people?

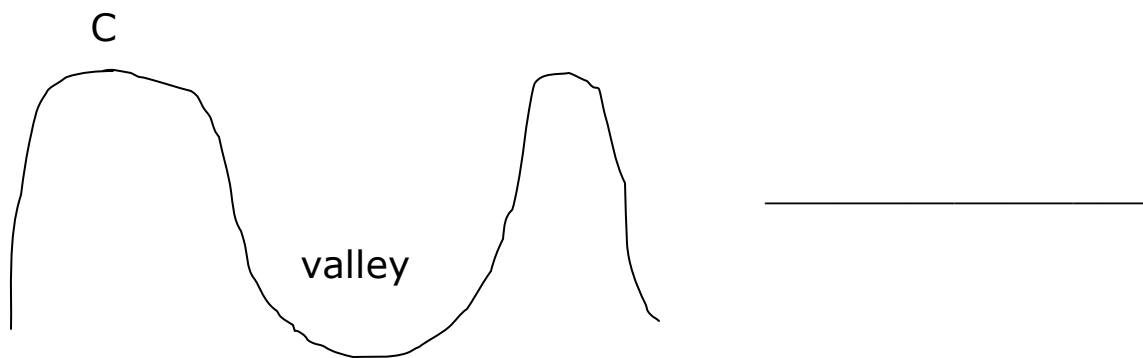
33. Give one reason why people keep birds at home.

34. State the quickest type of transport.

35. Mention one group of people found at school.

36. Give one month in the year. _____

37. Name part marked C



38. Give one animal which give us milk. _____

39. What is the use of a broom at school?

40. Who collects school fees and bank slips at school?

SECTION B

41.a) Give the main natural source of water.

b) List down any three domestic uses of water.

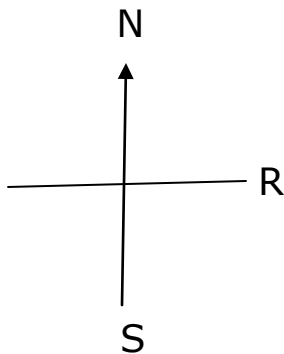
(i) _____

(ii) _____

(iii) _____

42.a) What name is given to the four major points of a compass?

b) Name the directions below.



N : _____

R : _____

S : _____

43.a) Who is a child?

b) Draw the following activities children do at home.

Washing utensils	sweeping	Washing clothes

44. List down four examples of Lakes in Uganda.

(i)_____ (ii)_____

(iii)_____ (iv)_____

45. Mention four important places in our town council.

(i)_____ (ii)_____

(iii)_____ (iv)_____

46. Give four examples of religious leaders.

(i)_____ (ii)_____

(iii)_____ (iv)_____

47. Write four activities done at school.

(i)_____

(ii)_____

(iii)_____

(iv)_____

48. Give the manmade lake found in Kampala.

b) Name the lake in Uganda where salt is mined.

c) Give the biggest Lake in Uganda. _____

d) List down one type of fish in our town council.

49. Draw the following maps.

cup	tree	table	pot

50. Mention two uses of cows at home.

(i) _____

(ii) _____

51. Identify two things got from animal skins.

(i) _____ (ii) _____

52. Which type of clouds gives us rainfall? _____

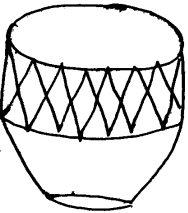
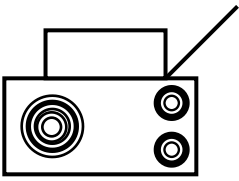

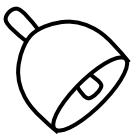
b) Give three uses of water at school.

(i) _____

(ii) _____

(iii) _____

53. Name these items used for communication.

54. **Match correctly**

A

Baganda

Banyoro

Langi

Bahima

B

Luganda

Runyankole

Runyoro

langi

a)Baganda _____

b)Banyoro _____

c)Langi _____

d)Bahima _____

55. Draw and name four items made out of clay.

*** END ***